





Theory Paper 1-2B


1. Look at the scale below and then answer the questions:



- a) What is the key of the scale? _____
 - b) What is the letter name of the note at the 3rd degree of the scale? _____
 - c) Place a bracket  over each semitone
2. Use semibreves to write out the following scales, ascending.
Add accidentals (sharps or flats) as required
Place a bracket  over each semitone




G Major




F Major

4. Here is a descending scale.

When counting up the degrees of a scale, we always start from the *lowest* note. So the first degree of *this* scale is _____



- a) What is the key of the scale? _____
- b) What is the letter name of the note at the 5th degree of the scale? _____
- c) Place a bracket  over each semitone